

2

Datum: ..... Naam: .....

Meet tussen de streepjes.

.....

.....

.....

.....

.....

.....

.....


.....

.....






.....

De lengte van lijnstukken meten en noteren in cm	..... op 10	..... op 100
--	-------------	--------------

- 1 Net vóór 25 staat .....
- 2 In de getallenrij staat 24 vijf plaatsen vóór .....
- 3 ..... is 8 meer dan 19.
- 4 30 verminderd met 8 geeft .....
- 5 De helft van 14 is .....
- 6 30 is gelijk aan 21 plus .....
- 7 Het verschil van 25 en 7 is .....
- 8 18 vermeerderd met 8 is .....
- 9 In de getallenrij staat 29 zes plaatsen na .....
- 10 Bij 5 moet ik ..... tellen om 23 te bekomen.
- 11 Het dubbel van 9 is .....
- 12 ..... is de helft van 18.
- 13 Net na 29 komt .....
- 14 ..... is 8 minder dan 25.
- 15 16 moet ik met ..... vermeerderen om 23 te hebben.
- 16 21 moet ik met ..... verminderen om 13 te hebben.
- 17 De som van 9 en 5 en 7 is .....
- 18 De helft van 16 is gelijk aan het dubbel van .....
- 19 Van 27 moet ik 8 aftrekken om ..... te bekomen.
- 20 26 is ..... meer dan het dubbel van 9.



Hoeveel puzzelstukjes tel je?



..... rijen van 4

..... rijen van 4

..... rijen van 4

..... rijen van 4

..... rijen van 4

..... x 4 = 12

..... x ..... = .....

..... x ..... = .....

..... x ..... = .....

..... x ..... = .....

..... rijen van 3

..... rijen van .....

..... rijen van .....

..... rijen van .....

..... rijen van .....






..... x 3 = 12

..... x ..... = .....

..... x ..... = .....

..... x ..... = .....

..... x ..... = .....



..... rijen van 4

..... rijen van 4

..... rijen van 4

..... rijen van 4

..... rijen van 4

..... x ..... = .....

..... x ..... = .....

..... x ..... = .....

..... x ..... = .....

..... x ..... = .....

..... rijen van .....

..... rijen van .....

..... rijen van .....

..... rijen van .....

..... rijen van .....


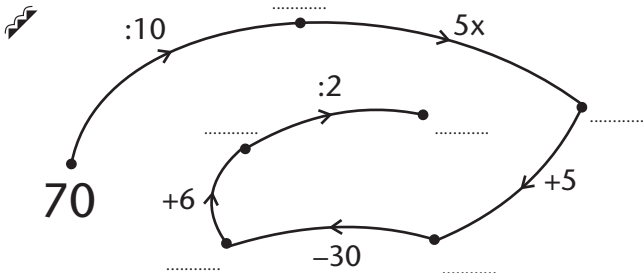
..... x ..... = .....

..... x ..... = .....

..... x ..... = .....

..... x ..... = .....

..... x ..... = .....



De maaltafel van 4	..... op 40	..... op 100
--------------------	-------------	--------------

Verdeel de knikkers eerlijk onder vier kinderen.



Elk kind krijgt ..... knikkers.



Elk kind krijgt ..... knikkers.



Elk kind krijgt ..... knikkers.



Elk kind krijgt ..... knikkers.



Elk kind krijgt ..... knikkers.



Elk kind krijgt ..... knikkers.



Elk kind krijgt ..... knikkers.



Elk kind krijgt ..... knikkers.



Elk kind krijgt ..... knikkers.



Elk kind krijgt ..... knikkers.

$20 : 4 = \dots$

$32 : 4 = \dots$

$16 : 4 = \dots$

$12 : 4 = \dots$

$8 : 4 = \dots$

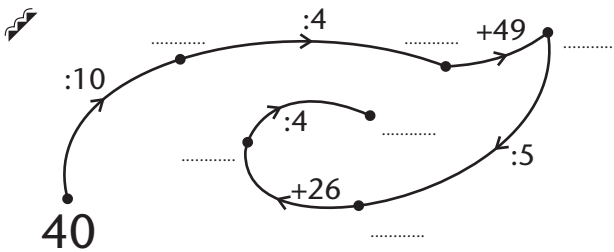
$24 : 4 = \dots$

$36 : 4 = \dots$

$28 : 4 = \dots$

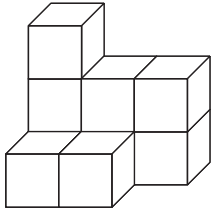
$\dots : 4 = 3$

$\dots : 4 = 4$



De deeltafel van 4	..... op 20	..... op 100
--------------------	-------------	--------------

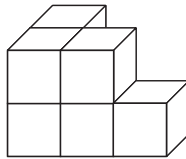
Tel de blokjes en vul de plattegrond in.



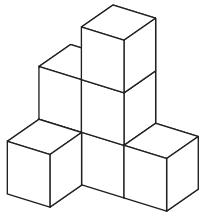
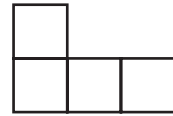
..... blokjes

**voorbeeld**

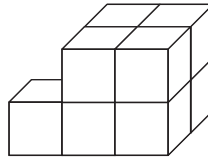
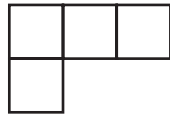
3	2	2
1	1	



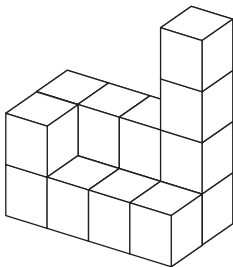
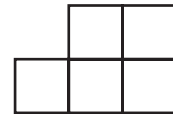
..... blokjes



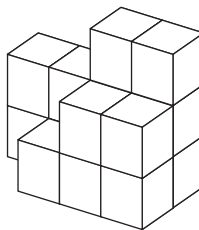
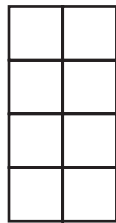
..... blokjes



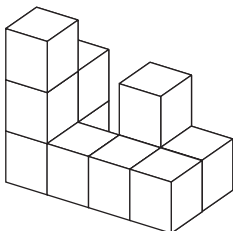
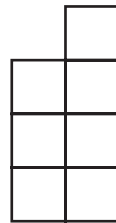
..... blokjes



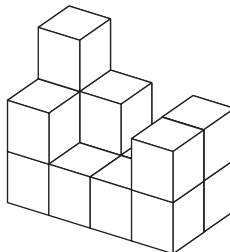

..... blokjes



..... blokjes



..... blokjes



..... blokjes

