

3

Datum: Naam:

$$\begin{array}{r} 307 \\ + 435 \\ \hline \end{array} \quad \begin{array}{r} 537 \\ + 129 \\ \hline \end{array} \quad \begin{array}{r} 372 \\ + 418 \\ \hline \end{array} \quad \begin{array}{r} 362 \\ + 147 \\ \hline \end{array} \quad \begin{array}{r} 86 \\ + 148 \\ \hline \end{array} \quad \begin{array}{r} 816 \\ + 74 \\ \hline \end{array}$$

$$\begin{array}{r} 538 \\ + 261 \\ \hline \end{array} \quad \begin{array}{r} 248 \\ + 51 \\ \hline \end{array} \quad \begin{array}{r} 308 \\ + 561 \\ \hline \end{array} \quad \begin{array}{r} 613 \\ + 45 \\ \hline \end{array} \quad \begin{array}{r} 39 \\ + 150 \\ \hline \end{array} \quad \begin{array}{r} 363 \\ + 226 \\ \hline \end{array}$$

$$\begin{array}{r} 464 \\ + 248 \\ \hline \end{array} \quad \begin{array}{r} 353 \\ + 517 \\ \hline \end{array} \quad \begin{array}{r} 649 \\ + 50 \\ \hline \end{array} \quad \begin{array}{r} 436 \\ + 171 \\ \hline \end{array} \quad \begin{array}{r} 615 \\ + 93 \\ \hline \end{array} \quad \begin{array}{r} 65 \\ + 352 \\ \hline \end{array}$$

Schik onder elkaar en reken uit.


$$\begin{array}{l} 418 + 23 + 216 \\ 7 + 57 + 471 \end{array}$$

$$\begin{array}{l} 55 + 218 + 527 \\ 414 + 43 + 175 \end{array}$$

$$\begin{array}{l} 617 + 38 + 12 \\ 355 + 9 + 6 \end{array}$$

$$\begin{array}{r} \\ \\ \\ + \\ \end{array} \quad \begin{array}{r} \\ \\ \\ + \\ \end{array} \quad \begin{array}{r} \\ \\ \\ + \\ \end{array} \quad \begin{array}{r} \\ \\ \\ + \\ \end{array} \quad \begin{array}{r} \\ \\ \\ + \\ \end{array} \quad \begin{array}{r} \\ \\ \\ + \\ \end{array}$$

Het vierde deel van 800 min het dubbel van 10 is

Cijferen, optellen. Herhaling
Meestal eenmaal onthouden

..... op 25

..... op 100

3

Datum: Naam:

$$\begin{array}{r} 203 \\ \times 4 \\ \hline 812 \end{array}$$

$$\begin{array}{r} 105 \\ \times 7 \\ \hline \end{array}$$

$$\begin{array}{r} 206 \\ \times 3 \\ \hline \end{array}$$

$$\begin{array}{r} 103 \\ \times 8 \\ \hline \end{array}$$

$$\begin{array}{r} 201 \\ \times 4 \\ \hline \end{array}$$

$$\begin{array}{r} 307 \\ \times 2 \\ \hline \end{array}$$

$$\begin{array}{r} 105 \\ \times 5 \\ \hline \end{array}$$

$$\begin{array}{r} 207 \\ \times 4 \\ \hline \end{array}$$

$$\begin{array}{r} 409 \\ \times 2 \\ \hline \end{array}$$

$$\begin{array}{r} 205 \\ \times 4 \\ \hline \end{array}$$

$$\begin{array}{r} 305 \\ \times 3 \\ \hline \end{array}$$

$$\begin{array}{r} 309 \\ \times 3 \\ \hline \end{array}$$

$$\begin{array}{r} 118 \\ \times 5 \\ \hline 590 \end{array}$$

$$\begin{array}{r} 224 \\ \times 4 \\ \hline \end{array}$$

$$\begin{array}{r} 317 \\ \times 3 \\ \hline \end{array}$$

$$\begin{array}{r} 335 \\ \times 2 \\ \hline \end{array}$$

$$\begin{array}{r} 149 \\ \times 2 \\ \hline \end{array}$$

$$\begin{array}{r} 229 \\ \times 3 \\ \hline \end{array}$$

$$\begin{array}{r} 447 \\ \times 2 \\ \hline \end{array}$$

$$\begin{array}{r} 338 \\ \times 2 \\ \hline \end{array}$$



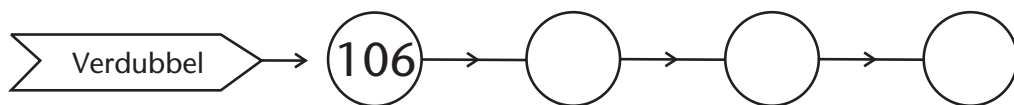
$$\begin{array}{r} 119 \\ \times 5 \\ \hline \end{array}$$

$$\begin{array}{r} 117 \\ \times 4 \\ \hline \end{array}$$

$$\begin{array}{r} 347 \\ \times 2 \\ \hline \end{array}$$

$$\begin{array}{r} 429 \\ \times 2 \\ \hline \end{array}$$

Uit het hoofd



Cijferen, vermenigvuldigen
E x HE en E x HTE. Onthouden bij E

..... op 25

..... op 100

3

Datum: Naam:

876		3	
- 6			292
27			3
- 27		x	876
06			
- 6			
0			

847		7	

729		3	

928		4	

328		2	

755		5	

968		8	

846		6	

759		3	

728		4	

924		4	

786		6	

987		7	

543		3	

388		2	

508		2	

604		4	

905		5	

900		6	

700		5	

36 minder dan het dubbel van 28 is



Cijferen, delen. HTE : E. Eerste cijfer geeft rest.
Tweede en derde gedeeltelijke deling gaan op.

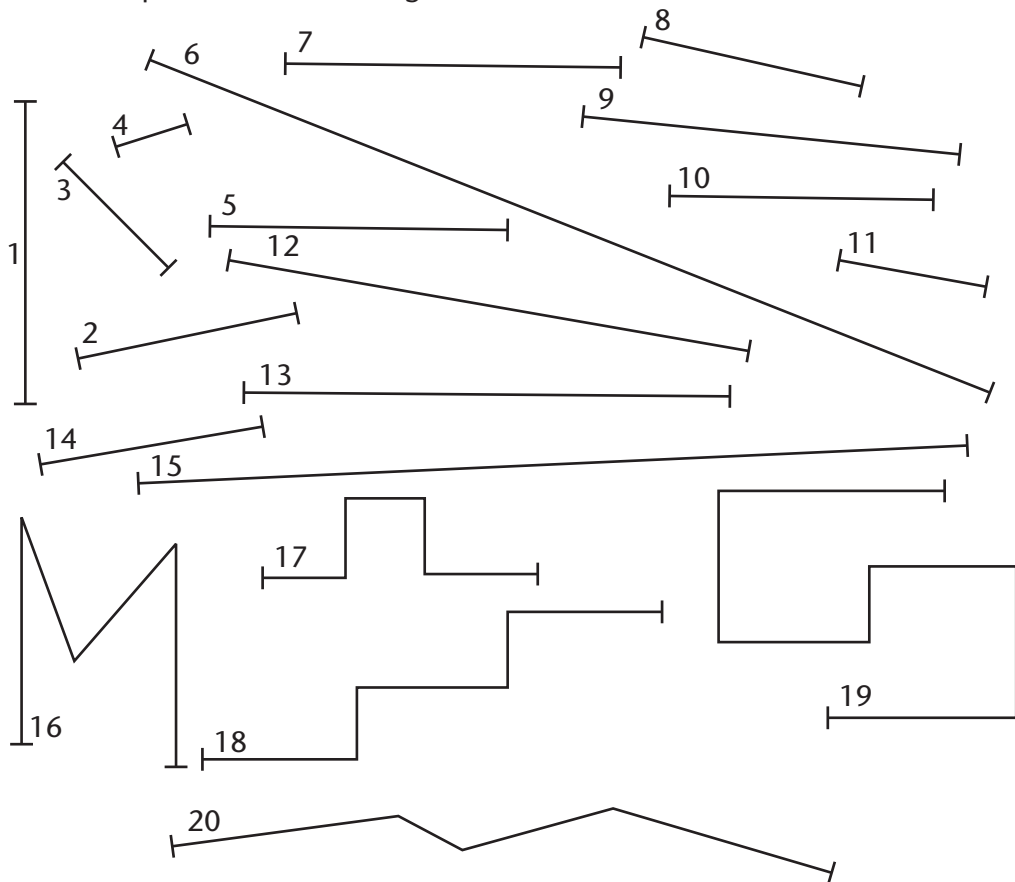
..... op 20

..... op 100

3

Datum: Naam:

Meet tot op 1/2 cm nauwkeurig.



1 = cm	6 = cm	11 = cm	16 = cm
2 = cm	7 = cm	12 = cm	17 = cm
3 = cm	8 = cm	13 = cm	18 = cm
4 = cm	9 = cm	14 = cm	19 = cm
5 = cm	10 = cm	15 = cm	20 = cm

Lengte (1e deel)
Meten tot op 1/2 cm nauwkeurig

..... op 20

..... op 100

€ 1 = cent

€ 1/2 = cent

50 cent = €

300 cent = €



= cent = €



= cent = €



= cent = €

150 cent = € + cent

300 cent = € + cent

450 cent = € + cent

€ 5 = x 50 cent

600 cent = €

12 x 50 cent = €

40 x 50 cent = €



= cent



= cent = €



= cent

3 euro 50 cent = cent

5 euro 50 cent = cent

€ 6 = cent



1 lang wit gesneden brood kost bij de bakker

1 klein wit ongesneden brood kost bij de bakker

1/4 kg margarine kost tussen en

1/4 kg roomboter kost

1 liter volle melk kost

1 liter afgeroomde melk kost

1 kg aardappelen kost


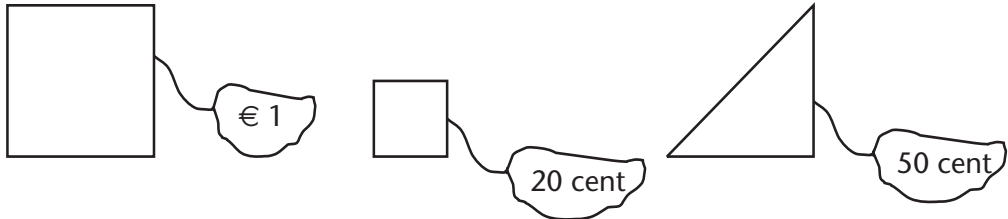
100 g jonge kaas kost

Een klein pak frieten kost in de frituur

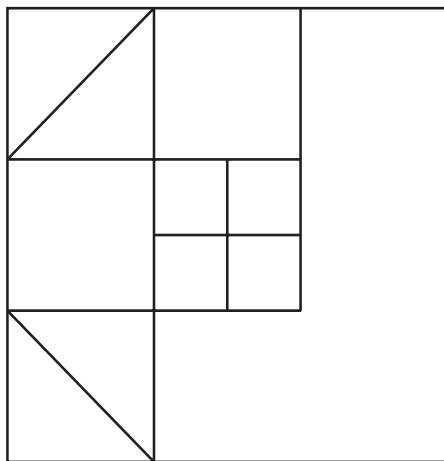
Een rit op de paardenmolen kost

Geld (1e deel) Herleidingen. Prijzen noteren op 30 op 100
---	-------------	--------------

Kijk goed en maak de tegelvloertjes af. Reken daarna uit hoeveel ze kosten.



Dit tegelvloertje kost €



Dit tegelvloertje kost €

Van welk vouwblad kun je een goede dobbelsteen maken?

